

Year 2 Autumn 2 Maths Activity Mat 2

Section 1

I have these coins in my purse.



I spent 5p.

How much money do I have left?

Section 2

Kuba had 6 pencils.

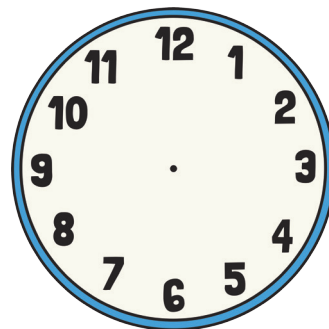
He lost 2 of them.

How many pencils does he have left?

 pencils

Section 3

Draw the hands on this clock to show 7 o'clock.



Section 4

Write a correct number statement using these numbers and signs:

| | | | | |
|---|---|---|---|---|
| 4 | = | × | 2 | 8 |
|---|---|---|---|---|

Section 5

Partition these numbers into tens and ones:

14 → tens ones

23 → tens ones

18 → tens ones

Section 6

I have 4 plant pots with 2 plants in each pot.

How many plants do I have altogether?

Section 7

| Animal | Tally |
|----------|-------|
| elephant | |
| zebra | |
| lion | |
| meerkat | |

Becky went to the zoo and counted the animals.

How many meerkats were there?

How many lions were there?

How many more lions than elephants were there?

Section 8

How many jellybeans would half of these be?



Year 2 Autumn 2 Maths Activity Mat 2 Answers

Section 1

I have these coins in my purse.



I spent 5p.

How much money do I have left?

5p

Section 2

Kuba had 6 pencils.


He lost 2 of them.

How many pencils does he have left?

4 pencils

Section 3

Draw the hands on this clock to show 7 o'clock.



Section 4

Write a correct number statement using these numbers and signs:

4 = × 2 8

$4 \times 2 = 8$ or $2 \times 4 = 8$

Section 5

Partition these numbers into tens and ones:

14 → 1 tens 4 ones

23 → 2 tens 3 ones

18 → 1 tens 8 ones

Section 6

I have 4 plant pots with 2 plants in each pot.

How many plants do I have altogether?

8 plants

Section 7

| Animal | Tally |
|----------|-------|
| elephant | |
| zebra | |
| lion | |
| meerkat | |

Becky went to the zoo and counted the animals.

How many meerkats were there?

11

How many lions were there?

5

How many more lions than elephants were there?

1

Section 8

How many jellybeans would half of these be?



2

Year 2 Autumn 2 Maths Activity Mat 2

Section 1

I have these coins in my purse.



I spent 20p.

How much money do I have left?

Section 2

Kuba had 26 pencils.

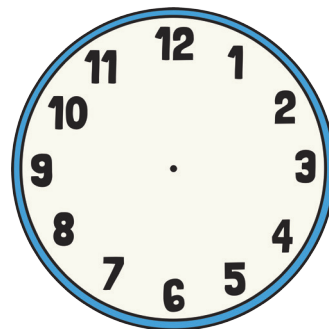
He lost 7 of them.

How many pencils does he have left?

 pencils

Section 3

Draw the hands on this clock to show 11:15.



Section 4

Write a correct number statement using these numbers and signs:

| | | | | |
|---|---|---|----|----|
| 5 | = | × | 10 | 50 |
|---|---|---|----|----|

Section 5

Partition these numbers into tens and ones:

28 → tens ones

42 → tens ones

71 → tens ones

Section 6

I have 8 plant pots with 2 plants in each pot.

How many plants do I have altogether?

Section 7

| Animal | Tally |
|----------|-------|
| elephant | |
| zebra | |
| lion | |
| meerkat | |

Paul went to the zoo and counted the animals.

How many meerkats were there?

How many elephants were there?

How many more zebras than elephants were there?

Section 8

How many jellybeans would half of these be?



Year 2 Autumn 2 Maths Activity Mat 2 Answers

Section 1

I have these coins in my purse.



I spent 20p.

How much money do I have left?

4p

Section 2

Kuba had 26 pencils.

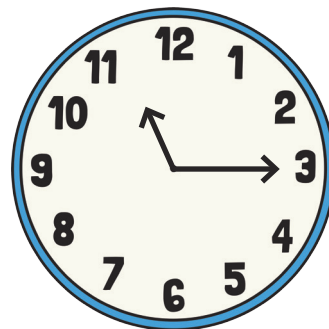
He lost 7 of them.

How many pencils does he have left?

19 pencils

Section 3

Draw the hands on this clock to show 11:15.



Section 4

Write a correct number statement using these numbers and signs:

5 = × 10 50

5 × 10 = 50 or 10 × 5 = 50

Section 5

Partition these numbers into tens and ones:

28 → 2 tens 8 ones

42 → 4 tens 2 ones

71 → 7 tens 1 ones

Section 6

I have 8 plant pots with 2 plants in each pot.

How many plants do I have altogether?

16 plants

Section 7

| Animal | Tally |
|----------|-------|
| elephant | |
| zebra | |
| lion | |
| meerkat | |

Paul went to the zoo and counted the animals.

How many meerkats were there?

16

How many elephants were there?

7

How many more zebras than elephants were there?

1

Section 8

How many jellybeans would half of these be?



4

Year 2 Autumn 2 Maths Activity Mat 2

Section 1

I have these coins in my purse.



I spent 35p.

How much money do I have left?

Section 2

Kuba had 36 pencils.

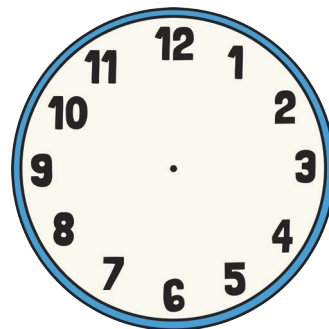
He lost 12 of them.

How many pencils does he have left?

 pencils

Section 3

Draw the hands on this clock to show quarter to 8.



Section 4

Write a correct number statement using these numbers and signs:

| | | | | |
|---|---|---|----|----|
| 5 | = | × | 12 | 60 |
|---|---|---|----|----|

Section 5

Partition these numbers into tens and ones:

67 → tens ones

89 → tens ones

93 → tens ones

Section 6

I have 18 plant pots with 2 plants in each pot.

How many plants do I have altogether?

Section 7

| Fish | Tally |
|----------|-------|
| clown | |
| angel | |
| guppy | |
| goldfish | |

Mei went to the aquarium and counted the different types of fish she saw.

Which fish did Mei see the most of?

How many more goldfish than clown fish were there?

Which fish were there the least of?

Section 8

How many jellybeans would half of these be?



Year 2 Autumn 2 Maths Activity Mat 2 Answers

Section 1

I have these coins in my purse.



I spent 35p.

How much money do I have left?

12p

Section 2

Kuba had 36 pencils.


He lost 12 of them.

How many pencils does he have left?

24 pencils

Section 3

Draw the hands on this clock to show quarter to 8.



Section 4

Write a correct number statement using these numbers and signs:

5 = × 12 60

5 x 12 = 60 or 12 x 5 = 60

Section 5

Partition these numbers into tens and ones:

67 → 6 tens 7 ones

89 → 8 tens 9 ones

93 → 9 tens 3 ones

Section 6

I have 18 plant pots with 2 plants in each pot.

How many plants do I have altogether?

36 plants

Section 7

| Fish | Tally |
|----------|-------|
| clown | |
| angel | |
| guppy | |
| goldfish | |

Mei went to the aquarium and counted the different types of fish she saw.

Which fish did Mei see the most of?

goldfish

How many more goldfish than clown fish were there?

7

Which fish were there the least of?

guppy fish

Section 8

How many jellybeans would half of these be?



6