

Year 1 Maths Activity Mat

3

Section 1

I have 3 pairs of shoes.

How many shoes is that altogether?



Section 2

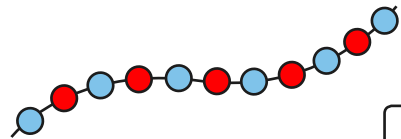
Shep had 3 dog biscuits.

Rover had 5. How many more biscuits did Rover have?



Section 3

Count the beads and write the number.



Section 4


I lose 5p from the money pictured below.

How much money have I got left?



Section 5

Cut the cake into quarters.



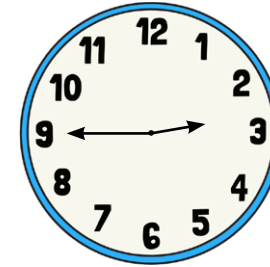
Section 6

What numbers are missing?

10	8	6			0
----	---	---	--	--	---

Section 7

What time is it?



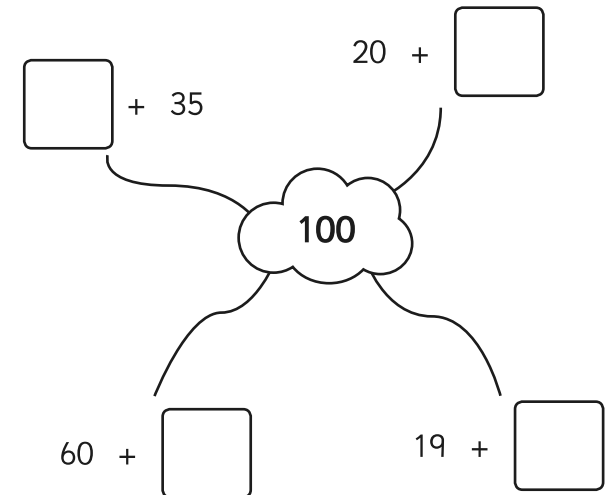
3 o'clock

quarter past 7

quarter to 3

Section 8

Complete the number pairs:



Year 1 Maths Activity Mat: 3

Answers

Section 1

I have 3 pairs of shoes.

How many shoes is that altogether?



6

Section 4

I lose 5p from the money pictured below.

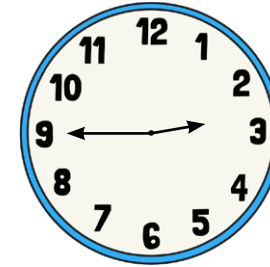
How much money have I got left?



26p

Section 7

What time is it?



3 o'clock

quarter past 7

quarter to 3

Section 2

Shep had 3 dog biscuits.

Rover had 5. How many more biscuits did Rover have?

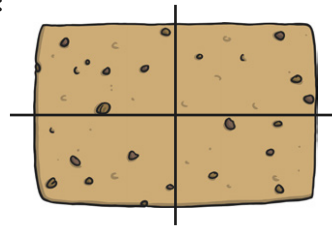


2

Section 5

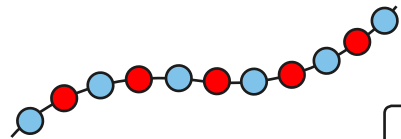
Cut the cake into quarters.

For example:



Section 3

Count the beads and write the number.



11

Section 6

What numbers are missing?

10	8	6	4	2	0
----	---	---	---	---	---

Section 8

Complete the number pairs:

