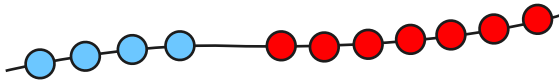


# Year 1 Maths Activity Mat

2


## Section 1

Write a number sentence to show how many beads there are altogether.



## Section 2

Draw and colour the next 2 cars in the pattern.



## Section 3


If today is Tuesday, what is it tomorrow?

Put a circle around the correct day.

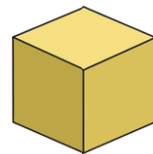
Monday    Wednesday    Thursday

## Section 5

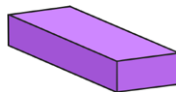
Draw lines to match the name and the shape.



cube



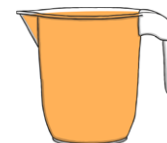
cuboid



triangular prism

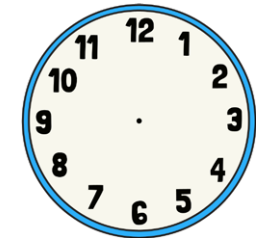
## Section 6

Which jug is empty?  
Tick the correct one.



## Section 7

Make this clock show half past 4.



## Section 8

How much money is here?

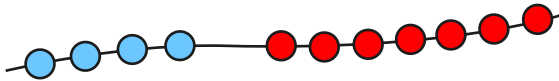


# Year 1 Maths Activity Mat: 2

## Answers

### Section 1


Write a number sentence to show how many beads there are altogether.



$$4 + 7 = 11$$

### Section 2

Draw and colour the next 2 cars in the pattern.



### Section 3

If today is Tuesday, what is it tomorrow?

Put a circle around the correct day.

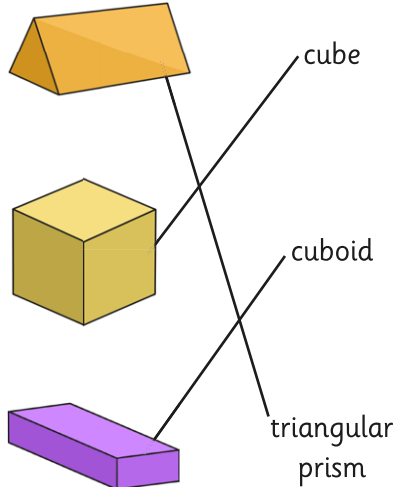
Monday

Wednesday

Thursday


### Section 5

Draw lines to match the name and the shape.




### Section 6

Which jug is empty?  
Tick the correct one.



### Section 7

Make this clock show half past 4.



### Section 4

Imagine seeing 2 elephants at the zoo.

How many legs would you see?

8

### Section 8

How much money is here?

