

Year 1 Maths Activity Mat: 1

Answers


Section 1

What's next?

10	20	30	40	50	60	70
----	----	----	----	----	----	----

Section 2

Add 1 more flower.



There would be flowers altogether

Section 3

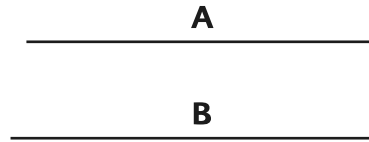
What's the missing number?

$$10 - \boxed{4} = 6$$




Section 4

Which line is the longest?



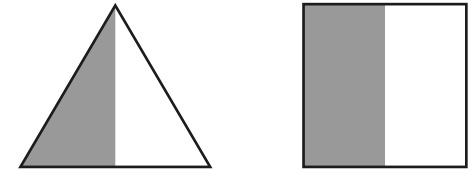
Section 5

If Lisa has 6 apples and she shares them equally with Sarah, how many apples will they have each?




Section 6

Colour half of these shapes.



Section 7

Circle the odd numbers:



Section 8

Fill in the boxes:

$$18 + \boxed{2} = 20$$

$$15 + \boxed{5} = 20$$